

Annual Examinations for Secondary Schools 2014

FORM 3

MUSIC (OPTION): PRACTICAL

Marking Scheme and Result Sheet for Practical Examination
(to be filled in for each candidate)

Name: _____

Class: _____

Exercise	Marks	Marks Given	Comment
Piece 1	15 marks		
Piece 2	15 marks		
Piece 3	15 marks		
Aural Awareness	13 marks		
Scales and Arpeggios	20 marks		
Sight Reading	10 marks		
Public Performance	12 marks		
Total	100 marks		

Marking Scheme

10 marks

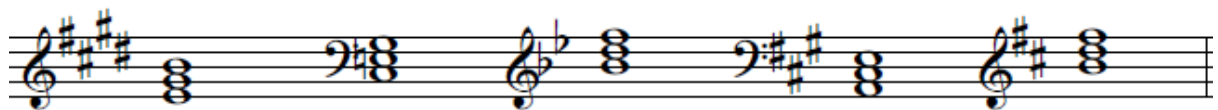
1. Name the following notes.



E FLAT G NATURAL G SHARP E F SHARP

10 marks

2. Write the tonic and dominant triads for the given scales accordingly.



Tonic triad of E major in Root Position with key-signature

Dominant triad of F minor in Root position without key-signature


Tonic triad of B flat major in Root position with key-signature

Dominant triad of A major in Root position with key-signature


Tonic triad of B minor in Root position without key-signature

12 marks


3. Write the following scales marking one set of semitones in every scale.




A flat major, ascending, with key-signature.



C sharp minor, descending, with key-signature.




F minor harmonic, ascending without key-signature.



B flat major descending, with key-signature.

4. Write the following Perfect Cadences. Remember to insert the key-signature near the clefs.

6 marks



Perfect Cadence of C major Perfect Cadence of A minor Perfect Cadence of F major

5. Transpose the following melody to the treble clef.

12 marks



6. Create a six-bar rhythm, including a triplet on a crotchet, and using demisemiquavers at least once.

10 marks

7. Re-write the following rhythmic pattern, grouping the notes correctly.

10 marks

8. Answer the following questions:

- To which section of the orchestra does the violin belong? String Section
- Which clef does the flute use? Treble clef
- To which section of the orchestra does the tuba belong? Brass Section
- Which clef does the bassoon use? Bass Clef
- Which is the lowest sounding instrument of the orchestra? The Tuba

9. Look at the following excerpt taken from 'Prelude in B minor' for piano by F. Chopin and answer the questions below.

10 marks

- How many times does the rhythm  occur? (Twice) (2)
- What is the time-name of the longest note? Dotted Crotchet (1)

- c. What is the letter name of the lowest note? G (1)
- d. Mark an interval of a perfect 5th. Bar 5, notes G-D (1)
- e. Give the meaning of the following: (5)

 Getting Louder

 Getting Softer

Tranquillo: Calmly

Meno Mosso: A bit slower

Dolce: Sweetly

10 marks

10. Write TRUE or FALSE next to the following statements:

- a. Bach composed ‘Sheep may safely graze’ on the occasion of a hunting party for the Duke of Weinmar. True.
- b. The Flight of the Bumble Bee is taken from the opera ‘The Tale of Tsar Saltan’ by Modeste Mussorgsky. True.
- c. Giuseppe Verdi was an Austrian composer. False.
- d. Three famous operas by Giuseppe Verdi are Aida, Il Trovatore and Rigoletto. True.
- e. The opening phrase of ‘Rhapsody in Blue’ by George Gershwin is played by the trumpet. False.

Theory Paper (Levels and Percentages)

Levels	Percentages
Level 8	6%
Level 7	61%
Level 6	24%
Level 5	9%
Total	100%