

DEPARTMENT FOR CURRICULUM,  
LIFELONG LEARNING AND EMPLOYABILITY  
Directorate for Learning and Assessment Programmes  
Educational Assessment Unit

Annual Examinations for Primary Schools 2021

ALTERNATIVE LEVEL 1

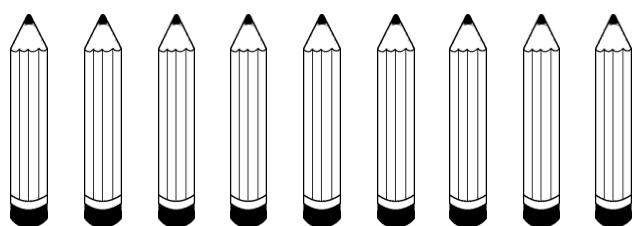
MATHEMATICS

Time: 1h 15min

Name: \_\_\_\_\_


Class: \_\_\_\_\_

1a) How many pencils?



pencils

b) How many apples?




apples

(4 marks)

2. There are 10 sweets.

Take away 3 sweets.

How many sweets are left?




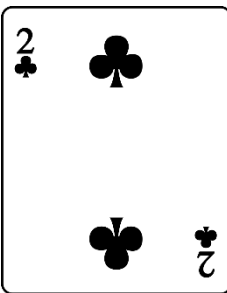
sweets

(4 marks)



3. Which card shows the **larger** number?

Tick (✓) the correct box.

a)

	
<input type="checkbox"/>	<input type="checkbox"/>

b)

	
<input type="checkbox"/>	<input type="checkbox"/>

(4 marks)

---

4. Write the next two numbers in the sequence.

a)

2	4	6		
---	---	---	--	--

b)

9	8	7		
---	---	---	--	--

(4 marks)

---

5. In the word **S M I L E**:

a) the **2<sup>nd</sup>** letter is

b) the letter after **M** is

c) the **first** letter is

d) the letter **between I and E** is

(4 marks)

6a) Double 4 = 4 + 4


Double 4 =

b) Double 5 =  +

Double 5 =

(4 marks)

7a) Circle the heavier.



leaf

tree

b) Circle the lighter.



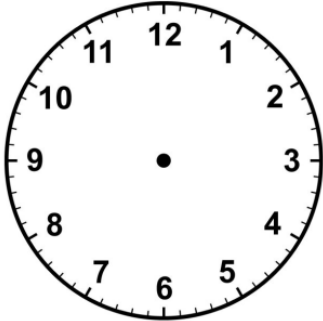
bed

mouse

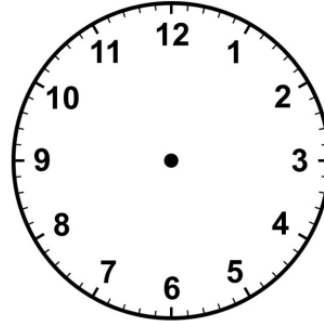
(4 marks)

8. Draw hands to show the time.  
Use a ruler.

a) 5 o'clock



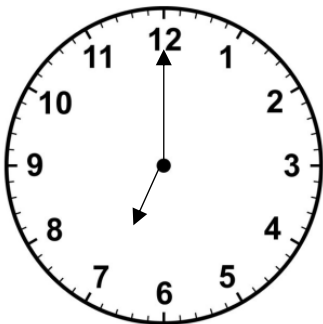
b) 9 o'clock



(4 marks)

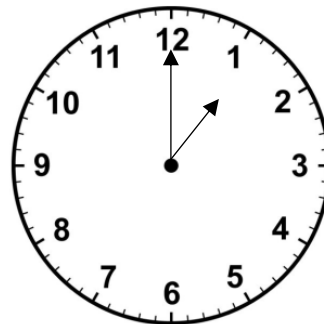
9. What time is it?

a)



o'clock


b)



o'clock

(4 marks)

10. Length



- a) The donkey is  blocks tall.
- b) The giraffe is  blocks tall.
- c) The donkey is  blocks **shorter than** the giraffe.

(6 marks)

---

11. Look at the objects.



- a) i. Circle the odd one out.
- ii. How many objects do not have wheels? \_\_\_\_\_
- b) 1 bicycle has 2 wheels.
- 5 bicycles have  wheels.

(6 marks)

12. Carla has the coins below.

a) Circle the coin with the largest value.




b) A stamp costs 21c.

Tick (✓) the coins to pay.




21c



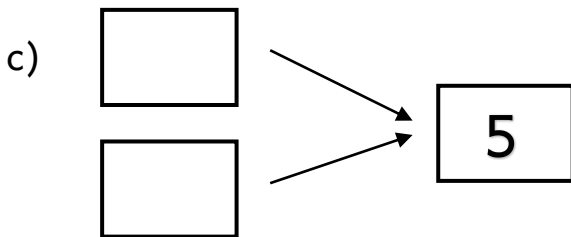
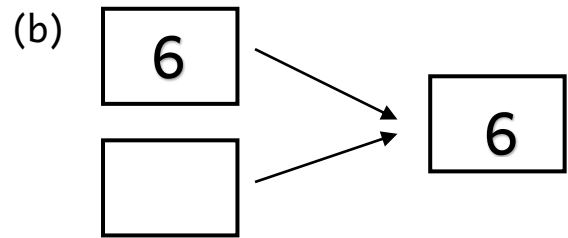
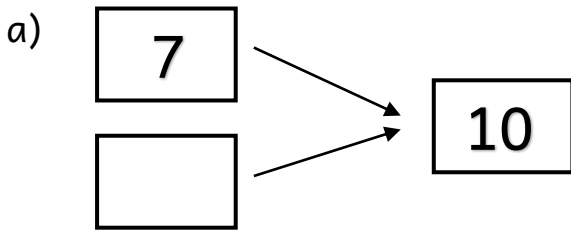
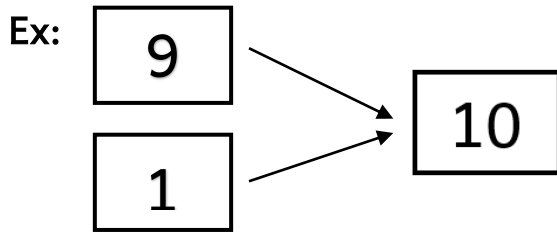
c) Another stamp costs 20c.

Draw coins to make 20c.



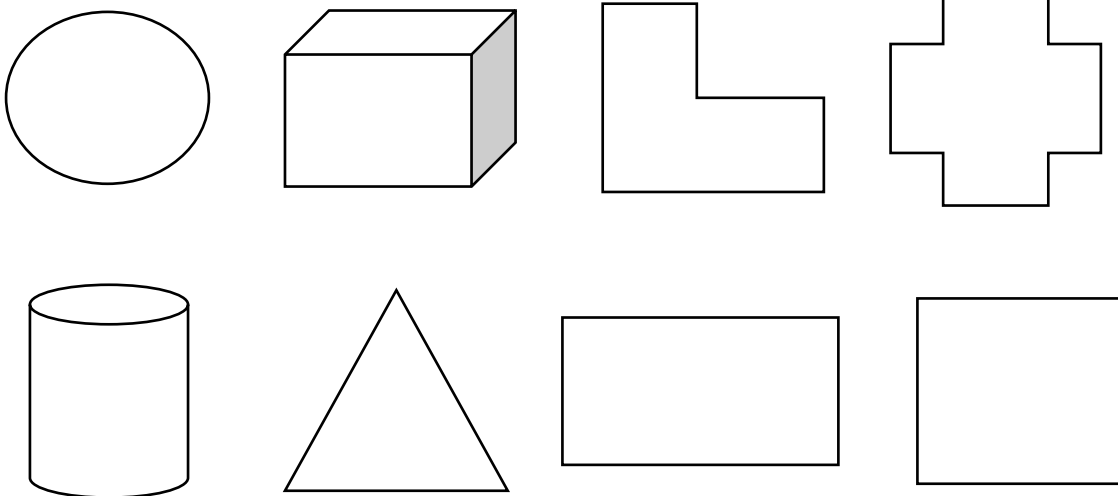
(7 marks)

13. Fill in to make totals.



(8 marks)

14. Circle 2-D shapes.







(8 marks)



15a) Fill in using the words:

NEXT TO


ABOVE


BELOW

i. The  is \_\_\_\_\_ the  .

ii. The  is \_\_\_\_\_ the  .

iii. The  is \_\_\_\_\_ the  .

b) Start from the  .

Move 1 square to the left.

Then move 2 squares up and draw an X.

(9 marks)

---

END OF EXAMINATION